

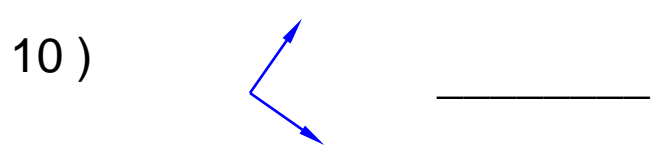
Name : _____

Score : _____

Teacher : _____

Date : _____

Classify each angle as acute, obtuse, right, or straight.



11) 90° _____

16) 53° _____

12) 97° _____

17) 96° _____

13) 75° _____

18) 5° _____

14) 180° _____

19) 138° _____

15) 56° _____

20) 136° _____



Name : _____

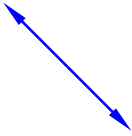
Score : _____

Teacher : _____

Date : _____

Classify each angle as acute, obtuse, right, or straight.

1)



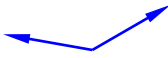
Straight

6)



Acute

2)



Obtuse

7)



Obtuse

3)



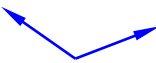
Acute

8)



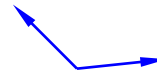
Acute

4)



Obtuse

9)



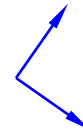
Obtuse

5)



Acute

10)



Right

11) 90°

Right

16) 53°

Acute

12) 97°

Obtuse

17) 96°

Obtuse

13) 75°

Acute

18) 5°

Acute

14) 180°

Straight

19) 138°

Obtuse

15) 56°

Acute

20) 136°

Obtuse

